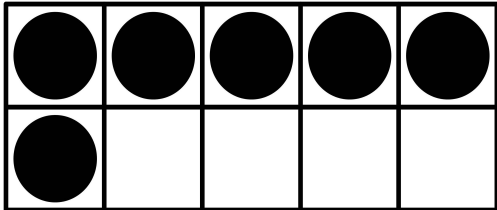


Name \_\_\_\_\_

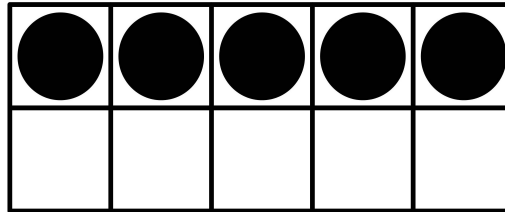
# How many more to make 10?

1.




$$6 + \underline{\quad\quad} = 10$$

2.



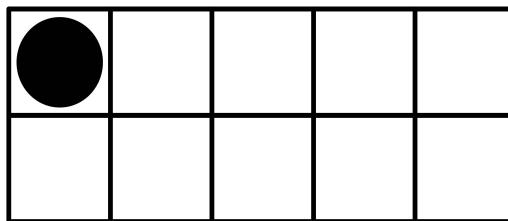
$$5 + \underline{\quad\quad} = 10$$

3.




$$10 + \underline{\quad\quad} = 10$$

4.



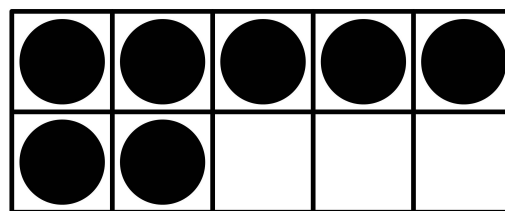
$$1 + \underline{\quad\quad} = 10$$

5.



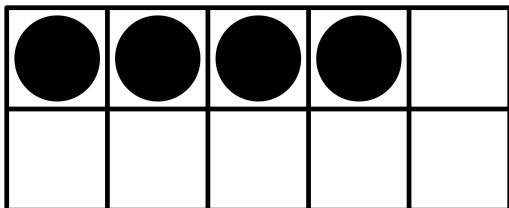
$$8 + \underline{\quad\quad} = 10$$

6.



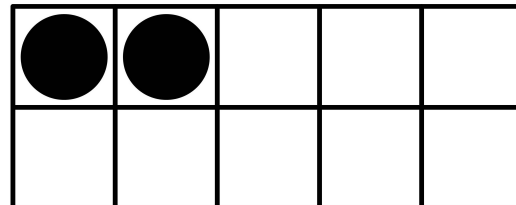
$$7 + \underline{\quad\quad} = 10$$

7.



$$4 + \underline{\quad\quad} = 10$$

8.



$$2 + \underline{\quad\quad} = 10$$