




HANDS-ON EQUATIONS[®]



Lesson #1
Classwork Sheet

Name: _____
Grade: _____



 From the picture, find the value of the pawn in each of the following problems, and write the check::

1.  +  = 10




$x =$ Check: _____

2.  + 2 =  + 9



$x =$ Check: _____

3.  + 3 =  + 7



$x =$ Check: _____

4.  + 8 =  + 

$x =$ Check: _____

5.  + 2 =  + 4



$x =$ Check: _____

6.  + 8 =  + 10 + 4



$x =$ Check: _____

7.  +  =  + 4 + 




$x =$ Check: _____

8.  + 2 =  + 7 + 7

$x =$ Check: _____

9.  + 4 =  + 10

$x =$ Check: _____

10.  +  =  + 10 + 2

$x =$ Check: _____